

2.003J/1.053J Dynamics and Control I
Fall 2007

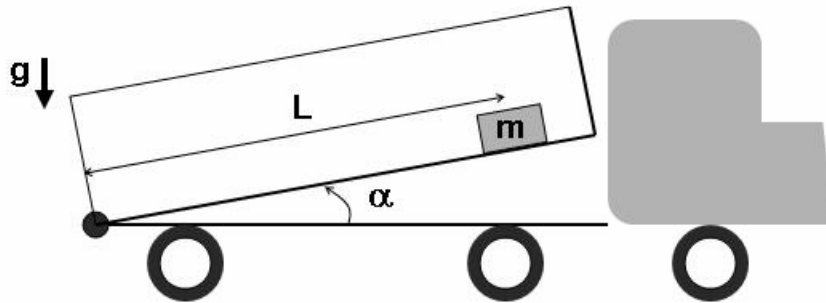
Problem Set 4

Out: Monday, 1 October, 2007
Due: Wednesday, 10 October, 2007

1. Dump truck

The bed of a dump truck is hinged at the rear, as shown in the figure below. Initially, the bed is at rest in the fully lowered position and a box of mass m lies at a distance L_0 from the back end of the truck.

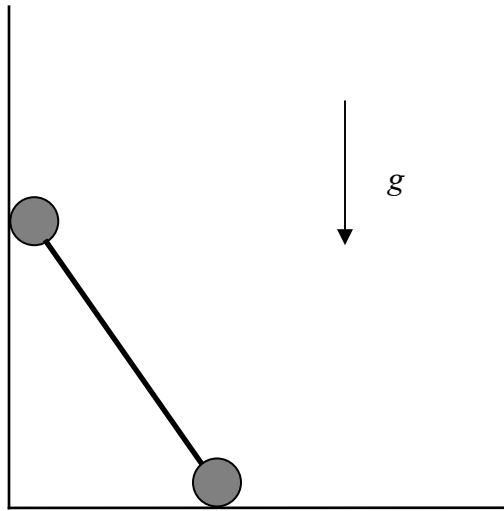
At time $t = 0$, the operator starts raising the bed at a constant angular acceleration α . Assume that the surface is frictionless and that the box can be treated as a point mass. Let L denote the instantaneous distance of the mass from the hinge. Note that gravity acts. Find the equation of motion of the mass and find the normal reaction force as a function of time, L or any of its derivatives and any other variables that are given.



2. Dumbbell problem

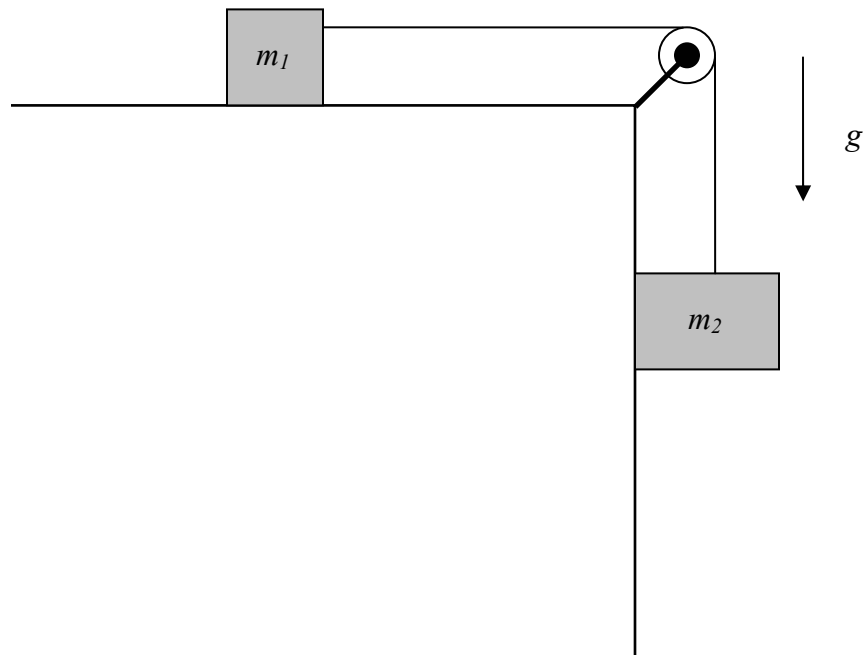
Two point masses each of mass m are connected by a massless rod of length L to form a dumbbell shape. Initially the dumbbell is held inclined between the ground and the wall perpendicular to the ground at a certain angle and suddenly released. The dumbbell starts sliding down. Note that gravity acts.

- Find the equation(s) of motion of the dumbbell using Newton's laws.
- Find the equation(s) of motion of the dumbbell using the work-energy principle.



3. Masses and a pulley

Two point masses, m_1 and m_2 are connected by a non-elastic string which goes over a pulley of negligible mass as shown in the figure below. Initially the masses are held at a certain position such that the string is tight. The masses are then suddenly released. Both the masses slide without friction. Assume that mass m_2 slides along the vertical wall and does not leave the wall. Note that gravity acts. Find the acceleration of each mass using the work-energy principle and find the tension in the string.



4. A bead on a fixed ring and a spring

A ring fixed to a support at the top is hanging vertically. A bead of mass m slides through the ring and is connected to the support through a spring of stiffness k as shown in the figure below. The length of the unstretched spring is almost negligible. Note that gravity acts.

- Find the equation of motion of the bead using Newton's laws and find the normal reaction force on the bead.
- Find the equation of motion of the bead using the work-energy principle.

